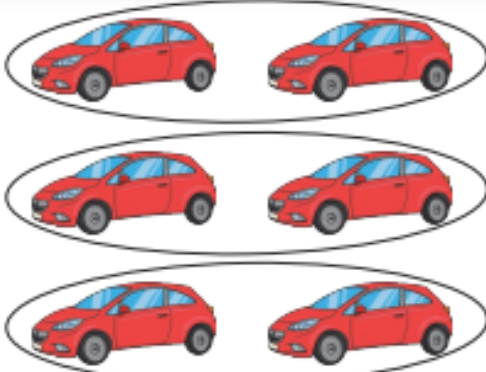


Monday 1st February 2021

MLJ is to use the x and = signs to solve missing number problems


We will use the same problems as yesterday but this time you need to add in the multiplication number sentence at the bottom



3 rows of 2 cars.

$2 + 2 + 2 =$ _____ cars.

$3 \times 2 =$ _____ cars.



_____ rows of _____ chocolates.


_____ + _____ + _____ + _____ = _____ chocolates.

_____ x _____ = _____ chocolates.

_____ rows of _____ bananas.

_____ + _____ + _____ = _____ bananas.

_____ x _____ = _____ bananas.





_____ rows of _____ bears.


_____ + _____ + _____ + _____ + _____ +
_____ = _____ bears.

_____ x _____ = _____ bears.

_____ rows of _____ bikes.

_____ + _____ + _____ + _____ + _____ + _____ +
_____ = _____ bikes.

_____ x _____ = _____ bikes.



Fiery challenge

_____ rows of _____ marbles.

_____ + _____ + _____ + _____ + _____ + _____ + _____
+ _____ + _____ + _____ = _____ marbles.

_____ x _____ = _____ marbles.

