

Pounds and pence

3



I can make the same amount of money in many ways.

1 Match the amounts that are equal.



16p

twenty-five pence

£25

sixty pence


twenty pounds



What amount has Mo made? £

Make this amount another way.

Draw your coins.



Compare answers with a partner. Is there another way?

2 How much money does each person have?

a) £

b) p


c) p



- 4 Dora earns £10 for walking the dog.
Tick the money Dora is given.

		
<input type="checkbox"/>	<input type="checkbox"/>	<input type="checkbox"/>

- 5 Count the money.

a)  £ and p

b)  £ and p

c)  £ and p

d)  £ and p

e)  £ and p

- 6 Jack has 4 silver coins and Rosie has 5 silver coins.
Show that Jack can have more money than Rosie.

Compare answers with a partner.