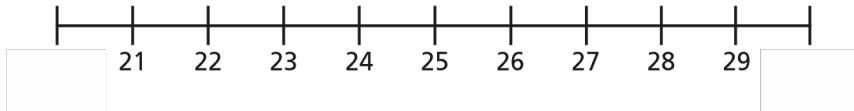


# Round to the nearest 10

- 1 a) Which multiples of 10 do the numbers sit between?  
Complete the number line.



- b) Circle the number 27

Which multiple of 10 is 27 closest to?

27 rounded to the nearest 10 is

- c) Circle the number 23

Which multiple of 10 is 23 closest to?

23 rounded to the nearest 10 is

- 2 Here is a number line.



- a) Which numbers round to 40?

\_\_\_\_\_

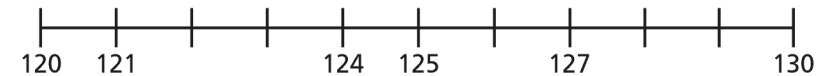
- b) Which numbers round to 50?

\_\_\_\_\_

- 3 Round each number to the nearest 10

- |                            |                            |                            |
|----------------------------|----------------------------|----------------------------|
| a) 41 <input type="text"/> | d) 79 <input type="text"/> | g) 33 <input type="text"/> |
| b) 19 <input type="text"/> | e) 9 <input type="text"/>  | h) 71 <input type="text"/> |
| c) 25 <input type="text"/> | f) 4 <input type="text"/>  | i) 99 <input type="text"/> |

4



- a) Are these numbers closer to 120 or 130?

Use the number line to help you complete the sentences.

121 is closer to  than

124 is closer to  than

127 is closer to  than

125 is the same distance from  as it is from

- b) Round each number to the nearest 10

121  124  127  125

5 Round each number to the nearest 10

a) 100 100 10 1 1 1

b) 712

c)

H	T	O

d) XXIX

e)

f) CXVIII


6 Circle the numbers that round to 380 to the nearest 10

389      379      371      381      375      385

7 Circle the numbers that round to 200 to the nearest 10

150      207      196      193      209      195

8



To round to the nearest 10, I only need to look at the ones column.

Do you agree with Ron? Explain your answer.

9 There are 450 children in a school, to the nearest 10

How many children could there be in the school?

---

---

10 Two different 2-digit numbers round to 70 to the nearest 10

The sum of the two numbers is 136

What could the two numbers be?

---

---