





MLJ: To write and calculate division statements.

Write the division and multiplication statements that can be shown by the arrays.

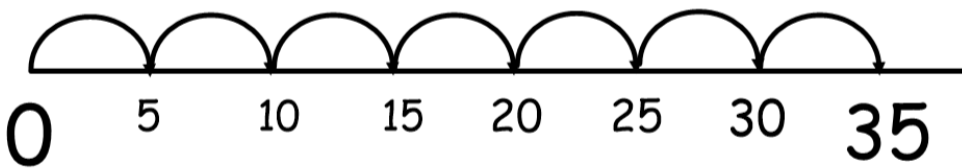


Use a number line to solve the following. Use the inverse to check your answers.

54 ÷ 6 =

36 ÷ 3 =

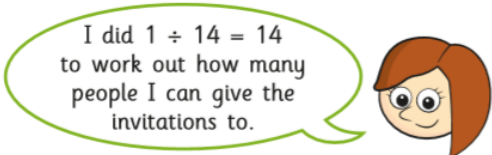
What division sentence is the number line showing?



Share the numbers into as many equal groups as possible. Write the division sentences to represent these.

- 45, 32, 24, 18, 60, 81

Rosie has 14 birthday invitations. She wants to give them out to children in her class. Each child will get 1 invitation each.



What mistake has Rosie made?