



Tuesday 9th February 2021



MLJ: To write and calculate division statements.

Write the division and multiplication statements that can be shown by the arrays.



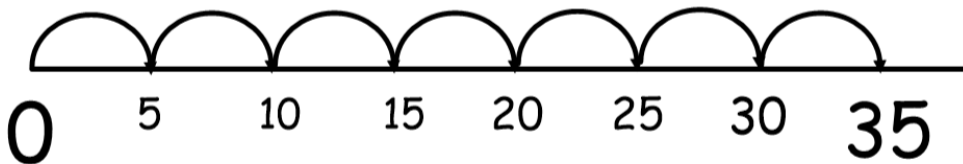
Use a number line to solve the following.

$35 \div 5 =$

$54 \div 6 =$

$36 \div 3 =$

What division sentence is the number line showing?



Share the numbers into as many equal groups as possible. Write the division sentences to represent these.

45

32

24

18

60

81

50

144