





MLJ: To write and calculate division statements.

Write the division statements that can be shown by the arrays.



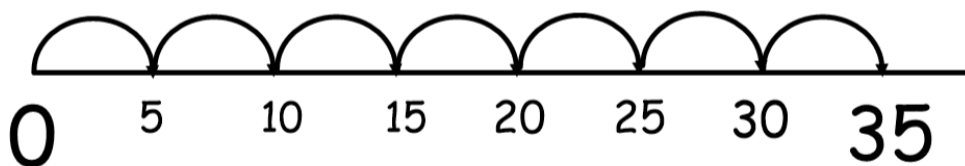
Use a number line to solve the following.

$35 \div 5 =$

$54 \div 6 =$

$36 \div 3 =$

What division sentence is the number line showing?



Share the numbers into as many equal groups as possible. Write the division sentences to represent these.

45

32

24

18