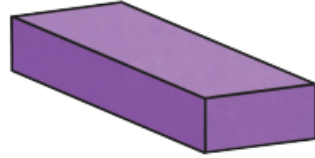




08/02/21

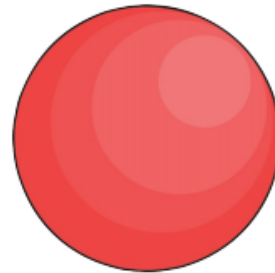
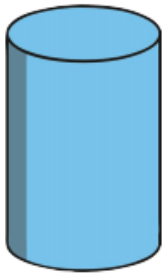
MLJ: to recognise and name 3D shapes 😊 😐 ?



cone

cube


cuboid



cylinder

pyramid

sphere



**triangular
prism**

Red bubble challenge:

Can you describe each shape? Think about if the shape is flat or curved. How many faces does it have?