

Monday 1<sup>st</sup> March 2020

MLJ is to tell the time to the hour, half past the hour and quarter past and to the hour

Task 1 is to draw the hands in the correct place.



8 o'clock



12 o'clock



3 o'clock



9 o'clock



7 o'clock



1 o'clock


Task 2 is to draw the hand in the correct place for half past the hour.




half past 8



half past 12




half past 3



half past 9



half past 7



half past 1

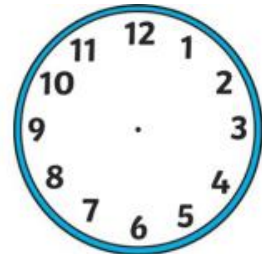
Task 1 is to draw the hands in the correct place to show quarter past the hour



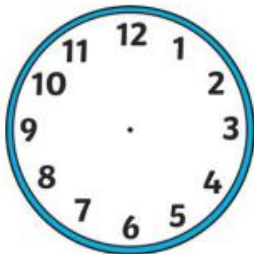
quarter past 8



quarter past 12




quarter past 3



quarter past 9




quarter past 7




quarter past 1

Task 4

Quarter to the hour



quarter to 12






quarter to 1



quarter to 10

**Fiery challenge!**

What time do these clocks tell us? Write your answers underneath!

 <p>_____</p>	 <p>_____</p>	 <p>_____</p>
--	--	--