

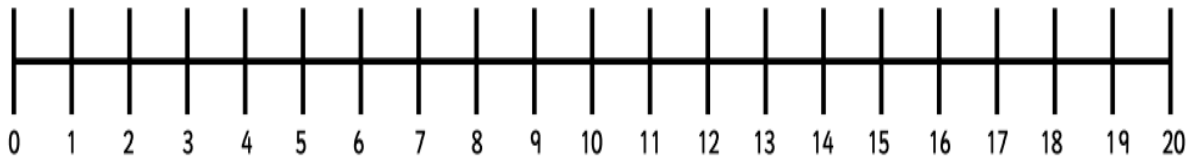
Thursday 4th February 2021

MLJ is to solve one -step multiplication word problems

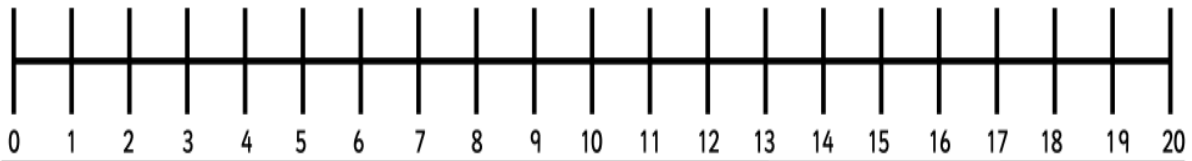
Have a go at the following questions.

Show your working out on the number lines.

4. What are 6 lots of 2? Can you draw the jumps?

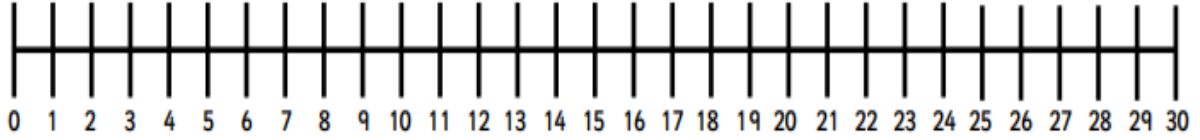


5. I can see 8 pairs of shoes. How many shoes can I see altogether?

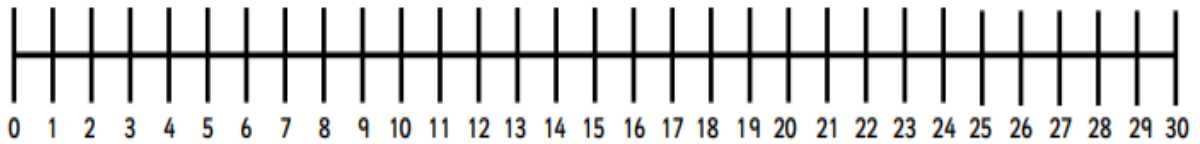


Use the number line to solve the following puzzles.

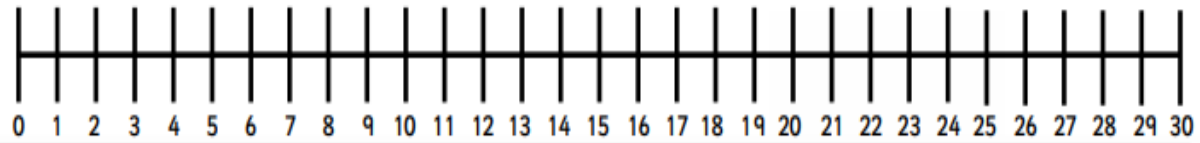
5. There are 6 tables in my classroom. If 5 children sit at each table, How many children are in the class?



6. Max scores 2 goals at each match of the season. He plays in 12 matches. How many goals does he score?



7. There are 10 crayons in a packet. If Mrs Hay buys 3 packets, how many crayons has she bought?



Fiery challenge

- ! Circle the three images that represent the same multiplication calculation.

